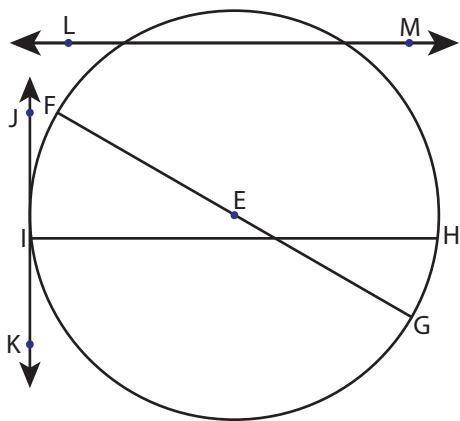


**Parts of Circle**

Moderate: S1

Identify the parts of each circle.

1)

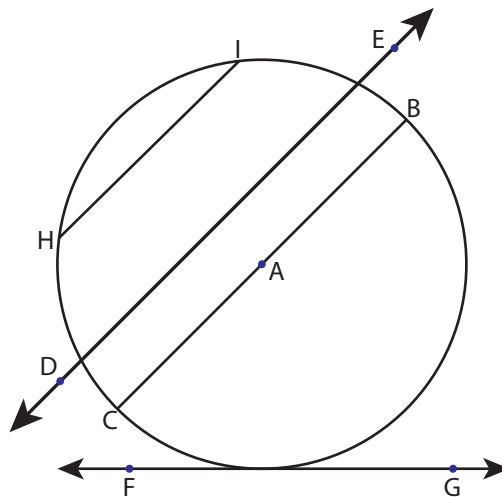


Circle =   **E**        Chord =   **HI, FG**  

Radius =   **EF, EG**        Tangent =   **JK**  

Diameter =   **FG**        Secant =   **LM**  

2)

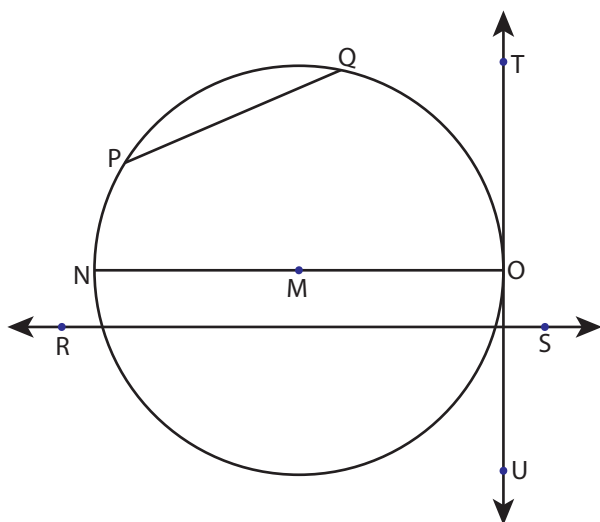


Circle =   **A**        Chord =   **BC, HI**  

Radius =   **AB, AC**        Tangent =   **FG**  

Diameter =   **BC**        Secant =   **DE**  

3)

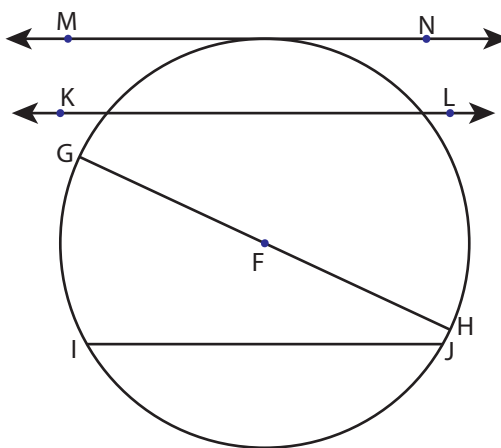


Circle =   **M**        Chord =   **PQ, NO**  

Radius =   **MN, MO**        Tangent =   **TU**  

Diameter =   **NO**        Secant =   **RS**  

4)



Circle =   **F**        Chord =   **GH, IJ**  

Radius =   **FG, FH**        Tangent =   **MN**  

Diameter =   **GH**        Secant =   **KL**