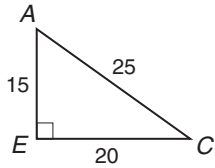


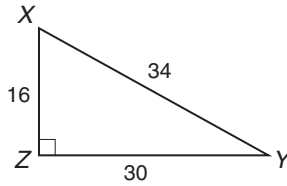
## Skills Practice

### Tangent Ratio

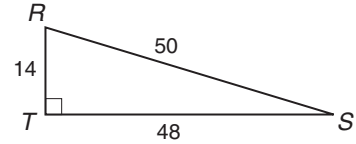
Find each tangent. Round to four decimal places, if necessary.



1.  $\tan A$



2.  $\tan Y$



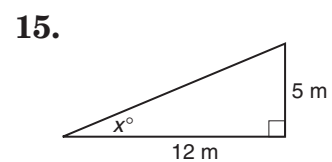
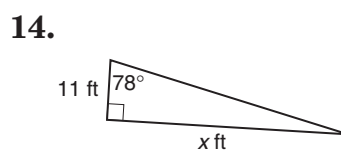
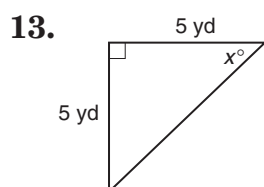
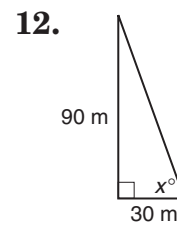
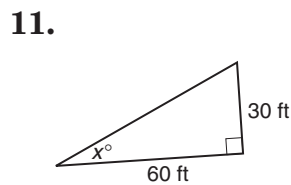
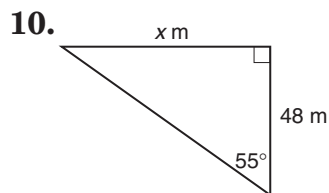
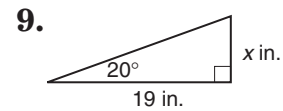
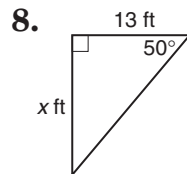
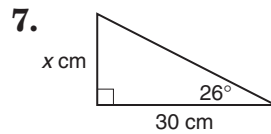
3.  $\tan S$

4.  $\tan C$

5.  $\tan X$

6.  $\tan R$

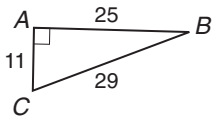
Find each missing measure. Round to the nearest tenth.



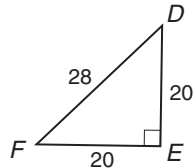
## Skills Practice

### Sine and Cosine Ratios

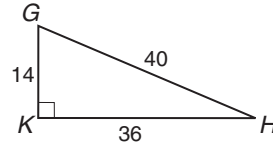
Find each sine or cosine. Round to four decimal places, if necessary.



1.  $\sin B$



2.  $\cos C$



3.  $\cos B$

4.  $\sin D$

5.  $\sin F$

6.  $\cos G$

Find each missing measure. Round to the nearest tenth.

