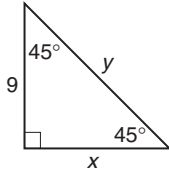


Skills Practice

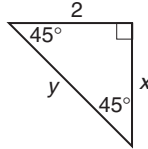
45° - 45° - 90° Triangles

Find the missing measures. Write all radicals in simplest form.

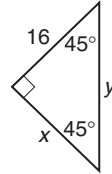
1.



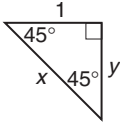
2.



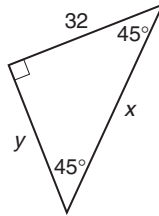
3.



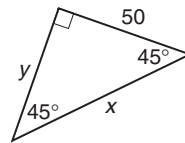
4.



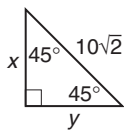
5.



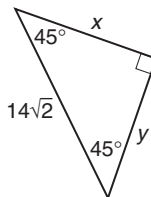
6.



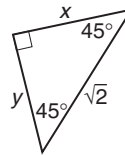
7.



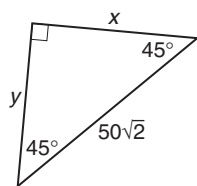
8.



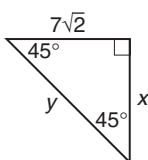
9.



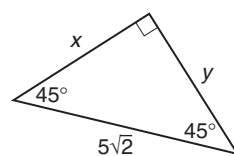
10.



11.



12.

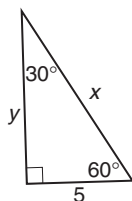


Skills Practice

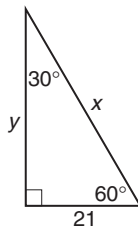
30° - 60° - 90° Triangles

Find the missing measures. Write all radicals in simplest form.

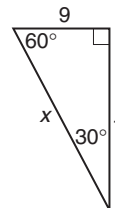
1.



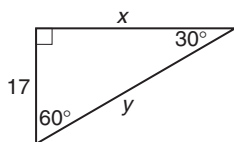
2.



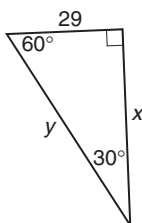
3.



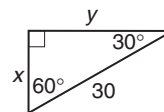
4.



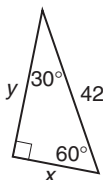
5.



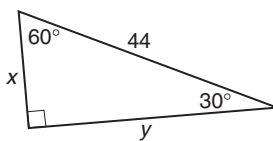
6.



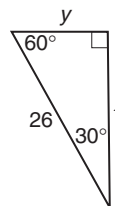
7.



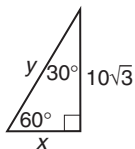
8.



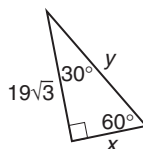
9.



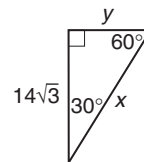
10.



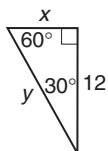
11.



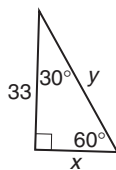
12.



13.



14.



15.

