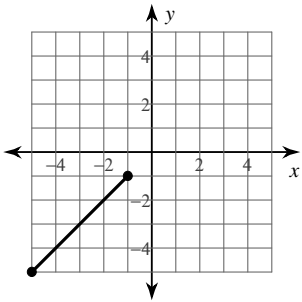


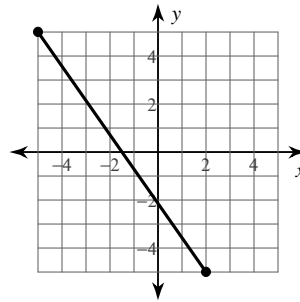
# The Midpoint Formula

**Find the midpoint of each line segment.**

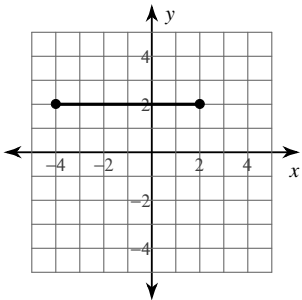
1)



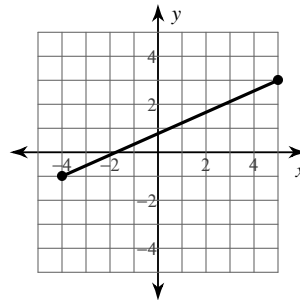
2)



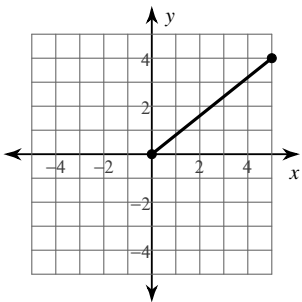
3)



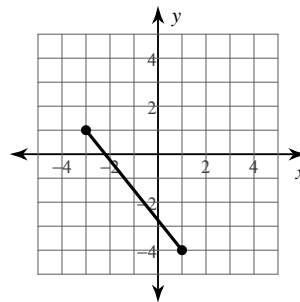
4)



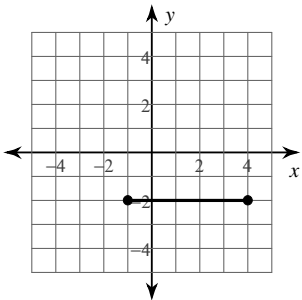
5)



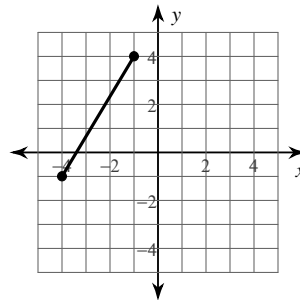
6)



7)



8)



**Find the midpoint of the line segment with the given endpoints.**

9)  $(-4, 4), (5, -1)$

10)  $(-1, -6), (-6, 5)$

11)  $(2, 4), (1, -3)$

12)  $(-4, 4), (-2, 2)$

13)  $(5, 2), (-4, -3)$

14)  $(-1, 1), (5, -5)$

15)  $(2, -1), (-6, 0)$

16)  $(-3.1, -2.8), (-4.92, -3.3)$

17)  $(-5.1, -2), (1.4, 1.7)$

18)  $(4.9, -1.3), (-5.2, -0.6)$

19)  $(5.1, 5.71), (6, 3.6)$

20)  $(3.1, -2.1), (-0.52, -0.6)$

**Find the other endpoint of the line segment with the given endpoint and midpoint.**

21) Endpoint:  $(-1, 9)$ , midpoint:  $(-9, -10)$

22) Endpoint:  $(2, 5)$ , midpoint:  $(5, 1)$

23) Endpoint:  $(5, 2)$ , midpoint:  $(-10, -2)$

24) Endpoint:  $(9, -10)$ , midpoint:  $(4, 8)$

25) Endpoint:  $(-9, 7)$ , midpoint:  $(10, -3)$

26) Endpoint:  $(-6, 4)$ , midpoint:  $(4, 8)$

**Critical thinking questions:**

27) Find the point that is one-fourth of the way from  $(2, 4)$  to  $(10, 8)$ .

28) One endpoint of a line segment is  $(8, -1)$ . The point  $(5, -2)$  is one-third of the way from that endpoint to the other endpoint. Find the other endpoint.