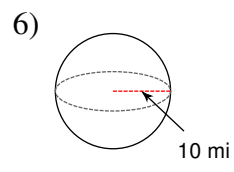
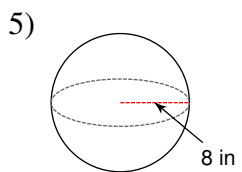
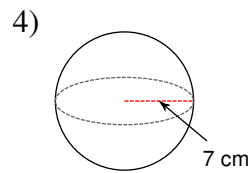
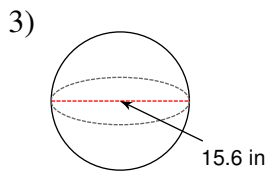
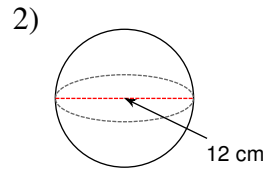
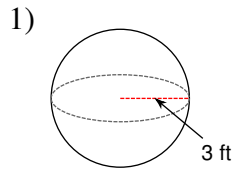


Spheres

Find the surface area of each figure. Round your answers to the nearest tenth, if necessary.

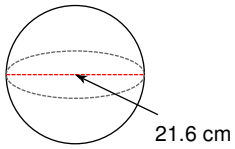


7) A sphere with a diameter of 6.2 in.

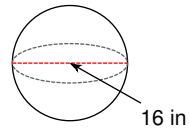
8) A sphere with a radius of 10 mi.

Find the volume of each figure. Round your answers to the nearest tenth, if necessary.

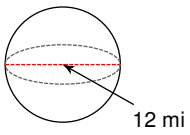
9)



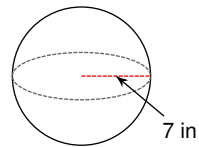
10)



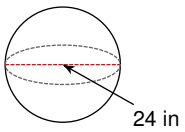
11)



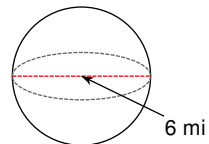
12)



13)



14)



15) A sphere with a diameter of 2 m.

16) A sphere with a diameter of 10 ft.