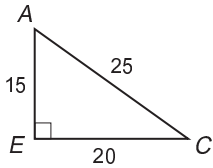


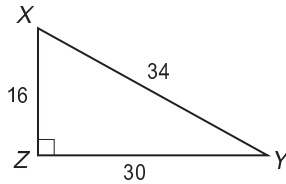
Skills Practice

Tangent Ratio

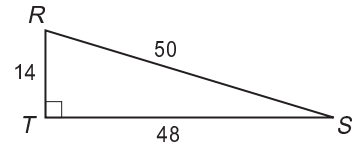
Find each tangent. Round to four decimal places, if necessary.



1. $\tan A$ **1.3333**



2. $\tan Y$ **0.5333**



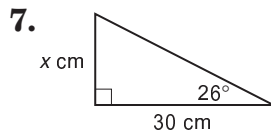
3. $\tan S$ **0.2917**

4. $\tan C$ **0.75**

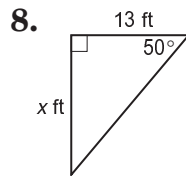
5. $\tan X$ **1.875**

6. $\tan R$ **3.4286**

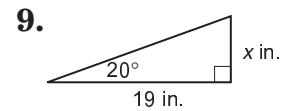
Find each missing measure. Round to the nearest tenth.



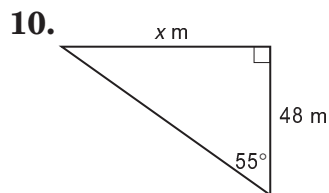
14.6



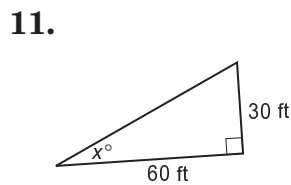
15.5



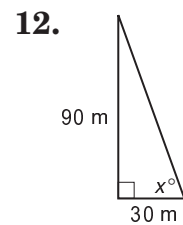
6.9



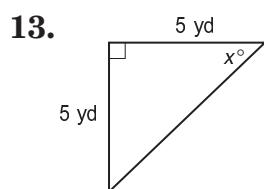
68.6



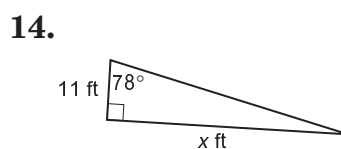
26.6



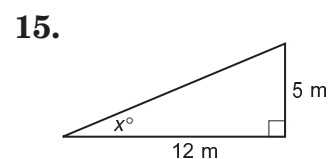
71.6



45



51.8

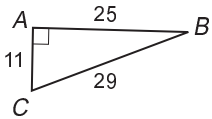


22.6

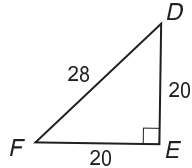
Skills Practice

Sine and Cosine Ratios

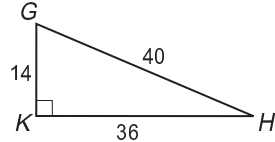
Find each sine or cosine. Round to four decimal places, if necessary.



1. $\sin B$ **0.3793**



2. $\cos C$ **0.3793**



3. $\cos B$ **0.8621**

4. $\sin D$ **0.7143**

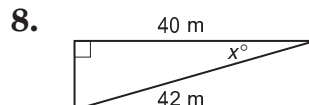
5. $\sin F$ **0.7143**

6. $\cos G$ **0.3500**

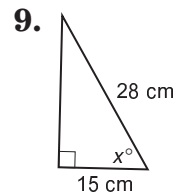
Find each missing measure. Round to the nearest tenth.



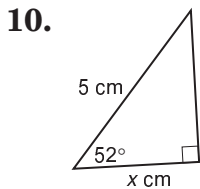
14.9



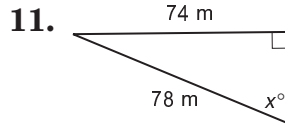
17.8



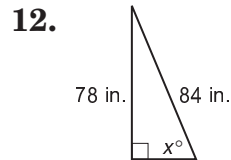
57.6



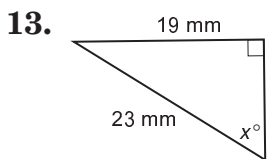
3.1



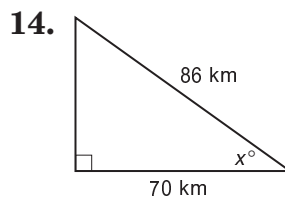
71.6



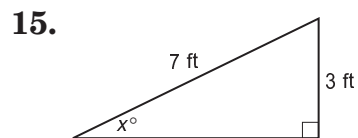
68.2



55.7



35.5



25.4