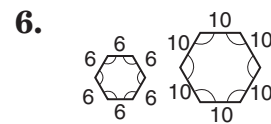
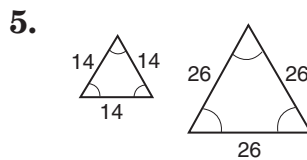
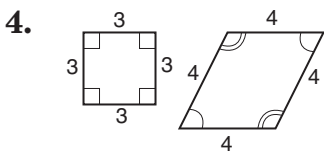
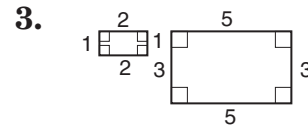
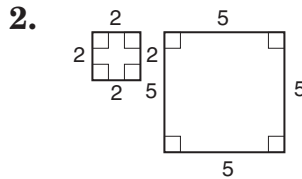
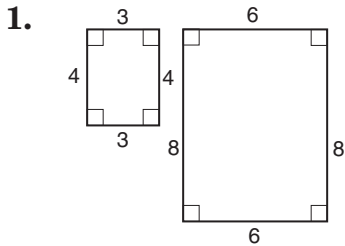


Skills Practice

Similar Polygons

Determine whether each pair of polygons is similar. Justify your answer.



If each pair of polygons is similar, find the values of x and y .

